

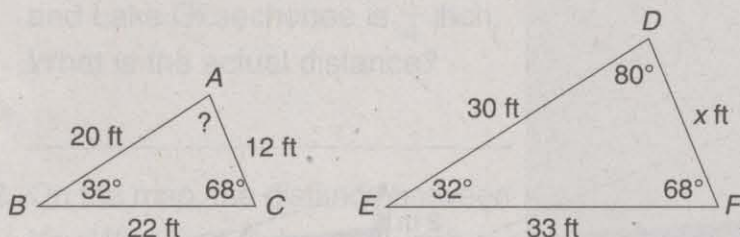
LESSON

Practice

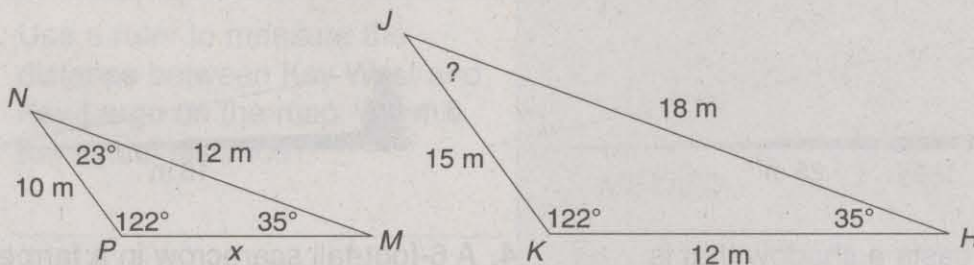
7-4 Similar Figures

Write the correct answers.

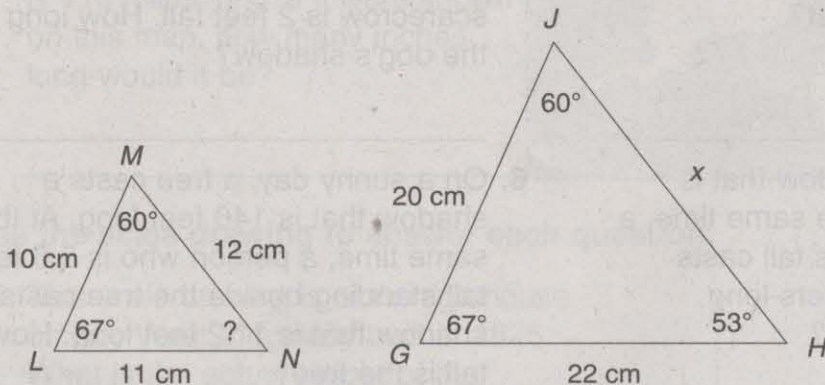
1. The two triangles are similar. Find the missing length x and the measure of $\angle A$.



2. The two triangles are similar. Find the missing length x and the measure of $\angle J$.



3. The two triangles are similar. Find the missing length x and the measure of $\angle N$.



4. Juanita planted two flower gardens in similar square shapes.

What are the measures of all the angles in each garden?

Explain how you know.